

Name _____

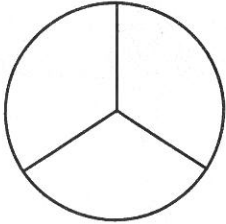
Practice

19-2

Describing Equal Parts of Whole Objects

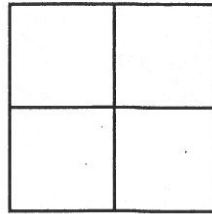
Color the given number of equal parts in each shape.

1.



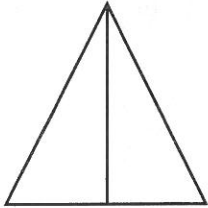
1 out of 3 equal parts
one third

2.



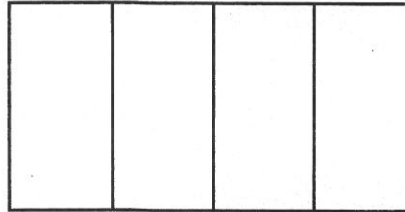
3 out of 4 equal parts
three fourths

3.



1 out of 2 equal parts
one half


4.



2 out of 4 equal parts
two fourths

Spatial Thinking

5. Which picture shows 2 out of 3 equal parts shaded?



Number Sense

6. How many fourths equal one whole?

(A) 4

(B) 3

(C) 2

(D) 1

Name _____

Practice

19-3

Making Parts of a Set

Color to show the part.


1. 1 out of 4 is shaded.



2. 1 out of 2 is red.



3. 3 out of 4 are yellow.







4. 2 out of 3 are green.



Spatial Thinking

5. Which picture shows 2 out of 4 shaded?

- (A) 
- (B) 
- (C) 
- (D) 

Algebra

6. June has 3 toy cars.
1 out of her 3 cars
is green.

Which part of the group
is not green?

- (A) 1 out of 2 cars
- (B) 1 out of 3 cars
- (C) 2 out of 3 cars
- (D) 2 out of 4 cars

Name _____


Practice

19-4


Describing Parts of Sets

Describe each picture.

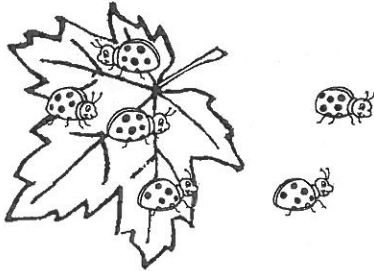
Write the numbers.



1. _____ out of _____
are small.



2. _____ out of _____
is gray.







3. _____ out of _____
are on the leaf.



4. _____ out of _____
have nuts.

Reasoning

5. 3 of Joel's 4 pets are lizards. Which picture could show all of his pets?

- (A) 
- (B) 
- (C) 
- (D) 

Reasonableness

6. Tara has 7 friends.
Most of her friends are girls. Which sentence tells about Tara's friends?

- (A) 2 out of 7 are girls.
- (B) 3 out of 7 are boys.
- (C) 4 out of 7 are boys.
- (D) 6 out of 7 are girls.

Name _____

Practice

19-5


Problem Solving: Draw a Picture

Read each story.

Draw a picture. Write the numbers.


1. Fred has 4 toy boats.
3 boats have sails.
What part of the group has sails?

_____ out of _____ have sails.



2. Mr. Novak has 2 shirts.
1 shirt has a pocket.
What part of the group has pockets?

_____ out of _____ has pockets.



Reasoning

3. There are 3 books on the shelf.
Kate reads 2 books.
Which picture shows the part that Kate read?

