


Name _____

Practice
14-12

Grams and Kilograms

Circle the better estimate.


1.  grams
kilograms

2.  grams
kilograms

3.  grams
kilograms

4.  grams
kilograms

5.  grams
kilograms

6.  grams
kilograms

7.  grams
kilograms

8.  grams
kilograms

Number Sense

9. Cindy has 2 puppies. They weigh 7 kilograms in all.
One puppy weighs 3 kilograms.
How much does the other puppy weigh?

$3 + \underline{\quad\quad} = 7$ kilograms

- (A) 3
(B) 4
(C) 5
(C) 10

Name _____

Practice
14-13

Comparing and Ordering by Temperature

Draw lines to match an object with each word.

1.



hottest

coldest

Spatial Thinking

Use the clues to put the mugs in order. Write the color.

2. The red mug is hotter than the black mug.
The blue mug is cooler than the black mug.

hottest

coldest

3. What would you wear on the hottest day of the year?

- (A) jeans and a light jacket
- (B) a winter coat and a pair of boots
- (C) a pair of shorts and a T-shirt
- (D) a pair of sweatpants and a sweatshirt

Name _____


Practice

15-1

Understanding the Hour and Minute Hands


Draw an hour hand and a minute hand to show each time.

1.




7 o'clock

2.




10 o'clock

3.




2 o'clock

4.




1 o'clock

5.



8 o'clock

6.



11 o'clock

Algebra

7. Mark the missing time.

2 o'clock, _____, 4 o'clock

- (A) 1 o'clock
- (B) 3 o'clock
- (C) 5 o'clock
- (D) 9 o'clock

8. Mark the missing time.


4 o'clock, _____, 6 o'clock

- (A) 10 o'clock
- (B) 5 o'clock
- (C) 3 o'clock
- (D) 2 o'clock


Name _____

Telling and Writing Time to the Hour

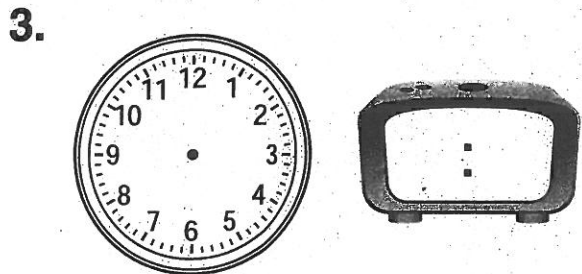
Draw the hands on each clock face.
Then write the time on the other clock.




12 o'clock



3 o'clock




7 o'clock



10 o'clock

Reasoning

5. Mark the clock that shows the same time as this clock.



Name _____

BLANK 100 CHART
