


Helping Hands



Start Get and .
Take turns.

Try Point to a digital clock. Ask your partner to say that time.
Use paper clips to put hands on the clock. Show that time.



Try Again Tell what you might be doing at each hour.

Play a Game



Start 👤👤

Get 12 red squares.

Cover each game space with a square. Take turns.

Try

Uncover two game spaces.

If you see two times that are the same, say those times.
Keep the squares.

If not, put the squares back where they were.

Take turns until all the spaces are uncovered.

Memory Match

1:30	twelve o'clock	half past nine	eight thirty
12:00	8:30	3:00	seven o'clock
three o'clock	half past one	7:00	9:30

To win, collect the most squares.



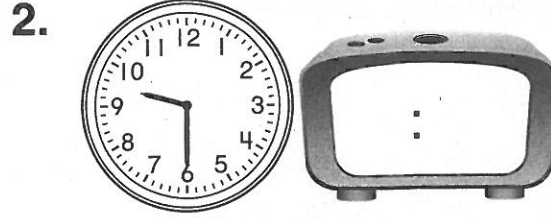
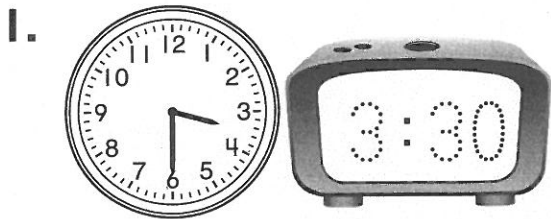
Try Again

Play again!

Name _____

Telling and Writing Time to the Half Hour

Write the time shown on each clock.





Journal

5. Show 3:00 on the first clock.

On the second clock, show the time 30 minutes later.

Is the hour hand still on 3?

Explain.



Estimating and Ordering Lengths of Time

About how long does each activity take?
Mark your estimate.

1.



- (A) about 1 minute
- (B) about 1 hour
- (C) about 1 day
- (D) about 2 days

2.



- (A) about 2 minutes
- (B) about 2 hours
- (C) about 1 day
- (D) about 2 days

Reasoning

3. Jon wakes up in the morning and gets ready for school. He gets dressed, brushes his teeth, and eats breakfast.

Put Jon's activities in order from the longest to the shortest.

_____ longest

_____ shortest

Name _____

Practice

15-5

Using the Calendar

Use this calendar to answer the questions.

January						
Sunday	Monday	Tuesday	Wednesday	Thursday	Friday	Saturday
			1	2	3	
4	5	6	7	8	9	10
11	12	13	14	15	16	17
18	19	20	21	22	23	24
25	26	27	28	29	30	31

February						
Sunday	Monday	Tuesday	Wednesday	Thursday	Friday	Saturday
1	2	3	4	5	6	7
8	9	10	11	12	13	14
15	16	17	18	19	20	21
22	23	24	25	26	27	28

March						
Sunday	Monday	Tuesday	Wednesday	Thursday	Friday	Saturday
1	2	3	4	5	6	7
8	9	10	11	12	13	14
15	16	17	18	19	20	21
22	23	24	25	26	27	28
29	30	31				

April						
Sunday	Monday	Tuesday	Wednesday	Thursday	Friday	Saturday
			1	2	3	4
5	6	7	8	9	10	11
12	13	14	15	16	17	18
19	20	21	22	23	24	25
26	27	28	29	30		

May						
Sunday	Monday	Tuesday	Wednesday	Thursday	Friday	Saturday
				1	2	
3	4	5	6	7	8	9
10	11	12	13	14	15	16
17	18	19	20	21	22	23
24/31	25	26	27	28	29	30

June						
Sunday	Monday	Tuesday	Wednesday	Thursday	Friday	Saturday
	1	2	3	4	5	6
7	8	9	10	11	12	13
14	15	16	17	18	19	20
21	22	23	24	25	26	27
28	29	30	28	29	30	

July						
Sunday	Monday	Tuesday	Wednesday	Thursday	Friday	Saturday
						1
2	3	4	5	6	7	8
9	10	11	12	13	14	15
16	17	18	19	20	21	22
23/30	24/31	25	26	27	28	29

August						
Sunday	Monday	Tuesday	Wednesday	Thursday	Friday	Saturday
		1	2	3	4	5
6	7	8	9	10	11	12
13	14	15	16	17	18	19
20	21	22	23	24	25	26
27	28	29	30	31		

September						
Sunday	Monday	Tuesday	Wednesday	Thursday	Friday	Saturday
				1	2	
3	4	5	6	7	8	9
10	11	12	13	14	15	16
17	18	19	20	21	22	23
24	25	26	27	28	29	30

October						
Sunday	Monday	Tuesday	Wednesday	Thursday	Friday	Saturday
1	2	3	4	5	6	7
8	9	10	11	12	13	14
15	16	17	18	19	20	21
22	23	24	25	26	27	28
29	30	31				

November						
Sunday	Monday	Tuesday	Wednesday	Thursday	Friday	Saturday
			1	2	3	4
5	6	7	8	9	10	11
12	13	14	15	16	17	18
19	20	21	22	23	24	25
26	27	28	29	30		

December						
Sunday	Monday	Tuesday	Wednesday	Thursday	Friday	Saturday
				1	2	
3	4	5	6	7	8	9
10	11	12	13	14	15	16
17	18	19	20	21	22	23
24/31	25	26	27	28	29	30

1. What day is the first of August? _____

2. What month comes just after May? _____

3. How many months have only 30 days? _____

4. What month comes just before November? _____

Reasoning

5. The last day of May is on a Sunday.
Mike goes to camp on the day after.
Which day does Mike go to camp?

(A) Sunday

(C) Tuesday






(B) Monday

(D) Saturday

Problem Solving:

Use Data from a Table

Use the schedule to answer the questions.

Time	Activity
9:00	 Art
9:30	 T-Ball
10:00	 Music
10:30	 Puppet Theater
11:00	 Swimming

1. What activity is at 9:00?

2. What activity is just before Music?

3. What activity is just after Puppet Theater?

Reasoning

4. What time does Music begin?

9:00

(A)

9:30

(B)

10:00

(C)

10:30

(D)

OJelly Bean Graph

30
29
28
27
26
25
24
23
22
21
20
19
18
17
16
15
14
13
12
11
10
9
8
7
6
5
4
3
2
1

green
black
brown
white
purple
red
yellow
pink
blue
orange